


VERIFICA

LA VOLIERA




Puoi raccontare questa situazione in due modi diversi. Aiutati guardando lo schieramento e i dati.

8 cocorite

4 trespoli

--- cocorite su ogni trespolo



8 cocorite

2 cocorite su ogni trespolo


--- trespoli


$8 : 4 = \text{---}$

$8 : 2 = \text{---}$

Scrivi le due divisioni corrispondenti a ogni schieramento.

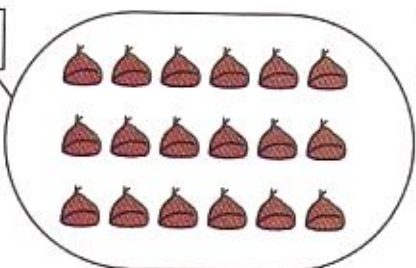
15

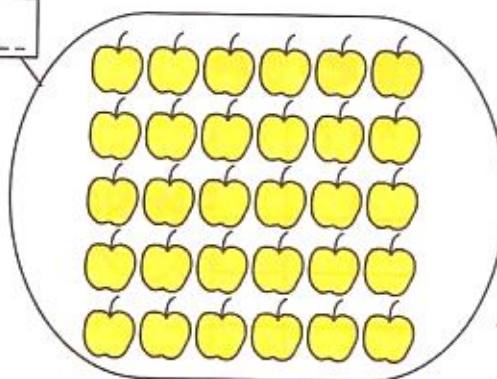




$\text{---} : \text{---} = \text{---}$
 $\text{---} : \text{---} = \text{---}$

$\text{---} : \text{---} = \text{---}$
 $\text{---} : \text{---} = \text{---}$





$\text{---} : \text{---} = \text{---}$
 $\text{---} : \text{---} = \text{---}$

$\text{---} : \text{---} = \text{---}$
 $\text{---} : \text{---} = \text{---}$